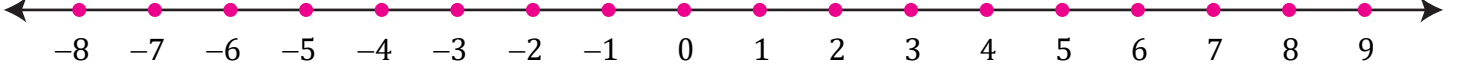


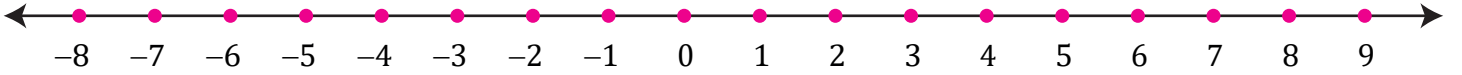


Aşağıdaki toplama işlemlerini sayı doğrusu üzerinde gösteriniz.

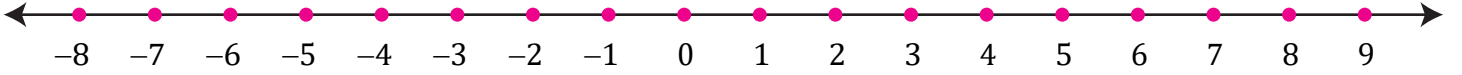
➔ $(+3)+(+2)=$



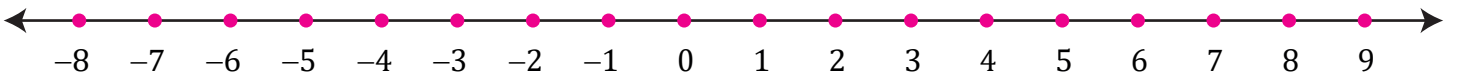
➔ $(-2)+(-4)=$



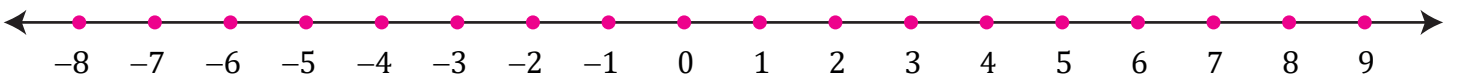
➔ $(-5)+(-2)=$



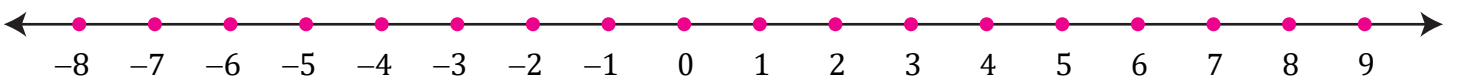
➔ $(-2)+(+9)=$



➔ $(+3)+(-6)=$



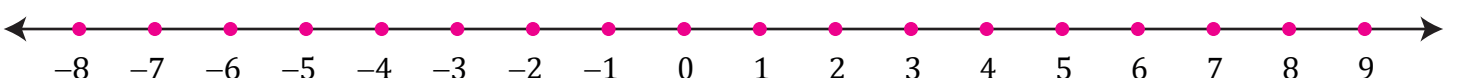
➔ $(+4)+(-3)=$



➔ $(+5)+(-6)=$

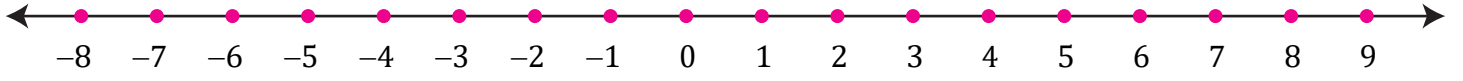


➔ $(+8)+(-5)=$

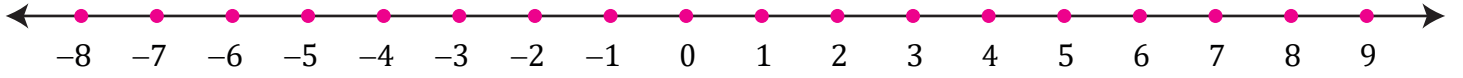


Aşağıdaki toplama işlemlerini sayı doğrusu üzerinde gösteriniz.

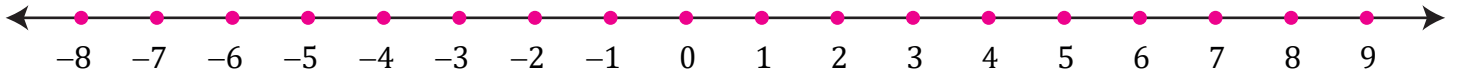
➔ $(+7)+(-10)=$



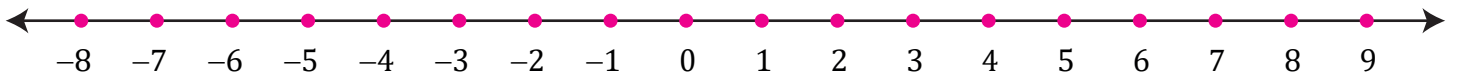
➔ $(+9)+(-5)=$



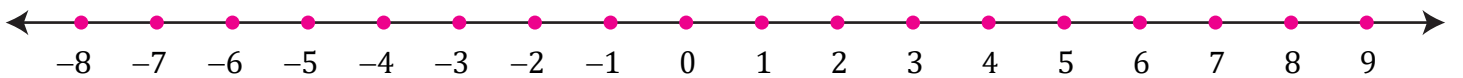
➔ $(+5)+(-6)=$



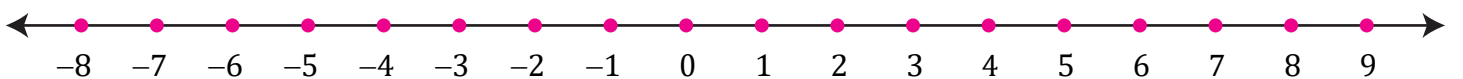
➔ $(-8)+(+8)=$



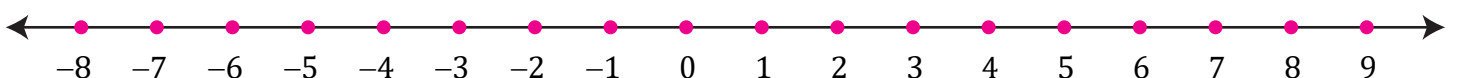
➔ $(-5)+(+9)=$



➔ $(-6)+(+13)=$



➔ $(+9)+(-13)=$



➔ $(+7)+(-9)=$

